


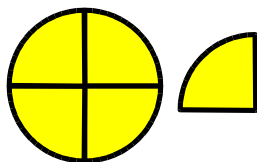
Corrigés des exercices de la séquence 6 :  
encadrement d'une fraction par deux entiers consécutifs

Encadrer les fractions suivantes par deux entiers consécutifs.



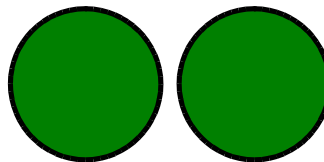
1

<

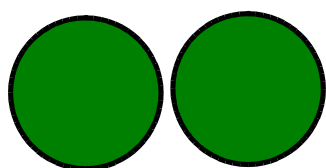


$\frac{5}{4}$

<

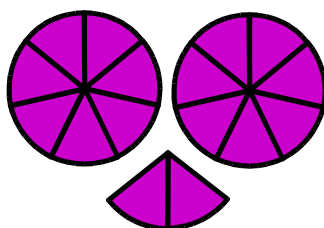


2




2

<




$\frac{16}{7}$

<

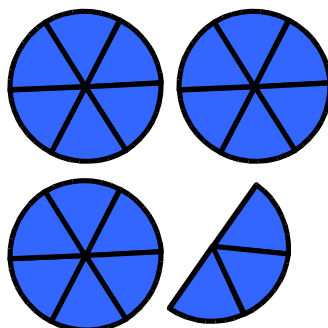


3




3

<




$\frac{21}{6}$

<

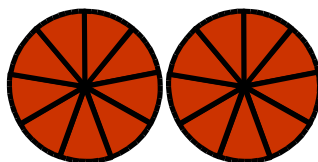


4




1

<



$\frac{18}{9}$

<



3